

VIRGINIA STANDARDS OF LEARNING

TEST ITEM SET

BIOLOGY

2010 Science Standards of Learning

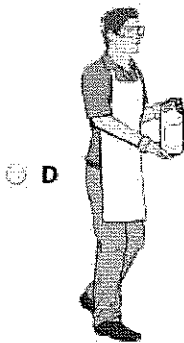

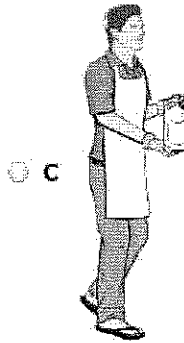
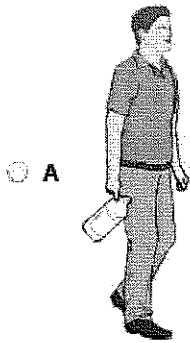
Released Spring 2015

Property of the Virginia Department of Education

Copyright ©2015 by the Commonwealth of Virginia, Department of Education, P.O. Box 2120, Richmond, Virginia 23218-2120. All rights reserved. Except as permitted by law, this material may not be reproduced or used in any form or by any means, electronic or mechanical, including photocopying or recording, or by any information storage or retrieval system, without written permission from the copyright owner. Commonwealth of Virginia public school educators may reproduce any portion of these released tests for non-commercial educational purposes without requesting permission. All others should direct their written requests to the Virginia Department of Education, Division of Student Assessment and School Improvement, at the above address or by e-mail to Student_Assessment@doe.virginia.gov.

SAMPLE A

A teacher in a biology laboratory is using a chemical to dissolve an eggshell. Which picture shows the safest laboratory practice?



Directions: Click and drag a term into each box. Each term may be used more than once.

SAMPLE B

A student conducted an investigation to determine the effect of water temperature on the amount of sugar that dissolves in a beaker of water. Identify components for trial 1 of this investigation.

Trial 1

| Beaker Number | Amount of Water (mL) | Temperature of Sugar (°C) | Temperature of Water (°C) | Amount of Sugar Dissolved (g) |
|---------------|----------------------|---------------------------|---------------------------|-------------------------------|
| 1 | 100 | 20 | 5 | 185 |
| 2 | 100 | 20 | 10 | 189 |
| 3 | 100 | 20 | 15 | 194 |
| 4 | 100 | 20 | 20 | 204 |

Terms

Variable

Constant

| | | |
|----------|----------|----------|
| | R | r |
| R | | |
| r | | |



Red flower color is dominant to white flower color in rose plants. What is the expected result of a cross between two heterozygous rose plants?

- A 100% red
- B 75% red, 25% white
- C 50% red, 50% white
- D 25% red, 75% white

1 of 46

Directions: Click and drag the answers to the correct boxes.

Place the phases of mitosis in the correct sequence.

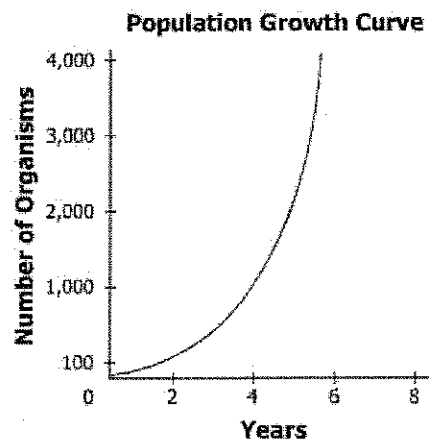


2 of 46

To classify an organism a scientist finds in the field, which of these will the scientist first compare to other known organisms?

- A. Dietary habits
- B. Ecological niche
- C. Physical structure
- D. Reproductive method

3 of 46



For the growth curve to continue increasing, which of these must occur?

- A. The organisms must adapt to a new habitat.
- B. The organisms must migrate to a new environment.
- C. The resources in the environment must be unlimited.
- D. The environment must provide a habitat for a large variety of organisms.

4 of 46

What did Rosalind Franklin contribute to the understanding of DNA molecules?

- A An image indicating the shape of a DNA molecule
- B An analysis of the chemical makeup of a DNA molecule
- C A thought that DNA carries genetic information
- D A theory about how DNA conveys genetic information

5 of 46

Directions: Click and drag the answers to the correct boxes.

Some functions of several structures of a fish are listed in the chart. Complete the chart by placing the structures of a cell next to the function they perform.

Structure and Function Comparison

| Function | Single-Cell Structure | Fish Structure |
|----------------------|-----------------------|----------------|
| Control of Functions | | Brain |
| Gas Exchange | | Gills |
| Waste Storage | | Bladder |
| Movement | | Fins, Tail |

Cell Membrane

Flagellum

Nucleus

Vacuole

6 of 46

Darwin's explanation for evolution was dependent on which scientific concept?

- A** The ability of organisms to learn
- B** The significance of social behaviors to survival
- C** The existence of variations in a population
- D** The relationship between size and survival

7 of 46

Which best helps scientists determine the age of fossils?

- A** Physical traits
- B** Genetic makeup
- C** Reproductive strategy
- D** Radioactive isotopes

8 of 46

A student is investigating the effect of plants on indoor air quality and states, "If plants are added to an indoor environment, the air quality will improve." This statement is an example of —

- A** a theory
- B** a procedure
- C** an observation
- D** a hypothesis

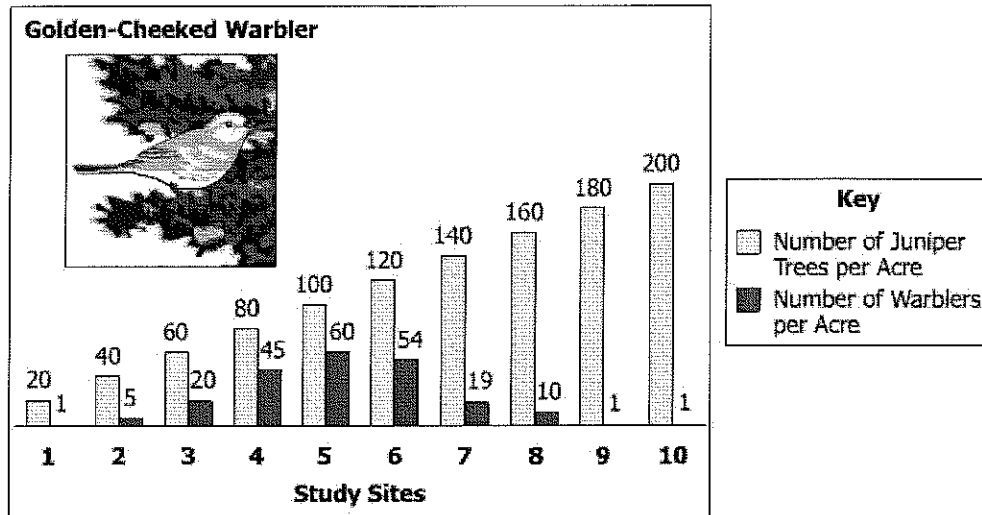
9 of 46

Although controversial at first, the germ theory of disease proposed that microorganisms were the cause of many diseases. Which of these was a result of the general acceptance that microorganisms cause disease?

- A** The development and use of antibiotics
- B** The belief in spontaneous generation
- C** The link between viruses and RNA
- D** The proof of a supernatural cause for illnesses

10 of 46

Golden-Cheeked Warbler/Juniper Tree Populations

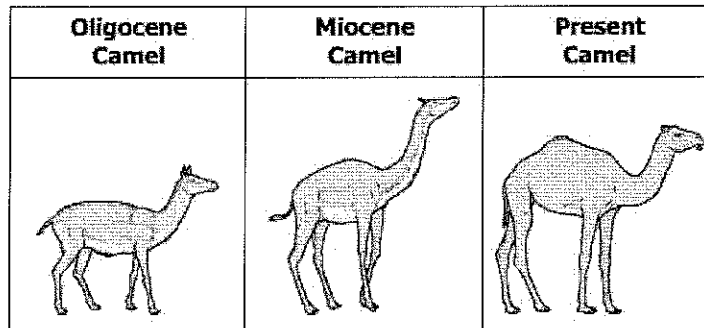


A biologist gathered data to show the interaction of the golden-cheeked warbler and juniper tree populations. Which conclusion did the biologist most likely make from the data shown?

- A As the juniper tree population increases, the golden-cheeked warbler population increases.
- B The optimum habitat for the golden-cheeked warbler population is 100 juniper trees per acre.
- C The golden-cheeked warbler population stabilizes when the juniper tree population increases above 120 trees per acre.
- D A golden-cheeked warbler population is unable to survive if juniper trees are present.

11 of 46

History of the Camel



Studying the differences between fossils and modern organisms helps scientists better understand the —

- A role of mutation in life functions
- B primary function of key macromolecules
- C adaptation of organisms through acquired traits
- D evolution of organisms over time

12 of 46

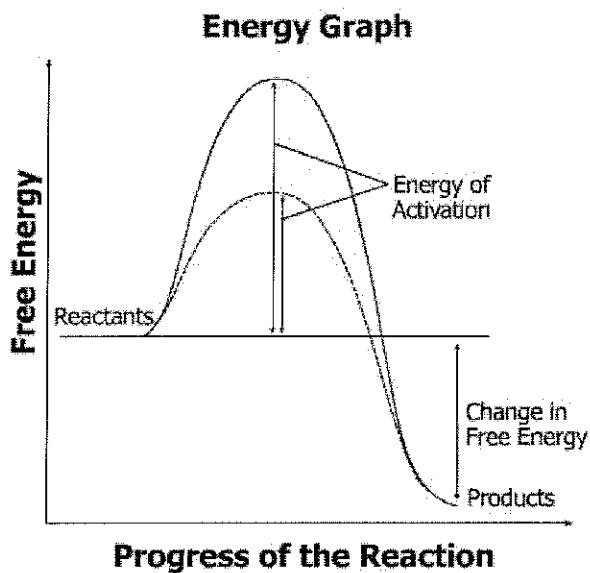
Unknown Organism

- Nucleus present
- Mitochondria present
- Multicellular
- Cells grow in columns
- Cell wall made of chitin
- Decomposer

This chart shows observations made of an unknown organism. Based on this information, the organism most likely belongs to the kingdom —

- A Fungi
- B Plantae
- C Eubacteria
- D Animalia

13 of 46



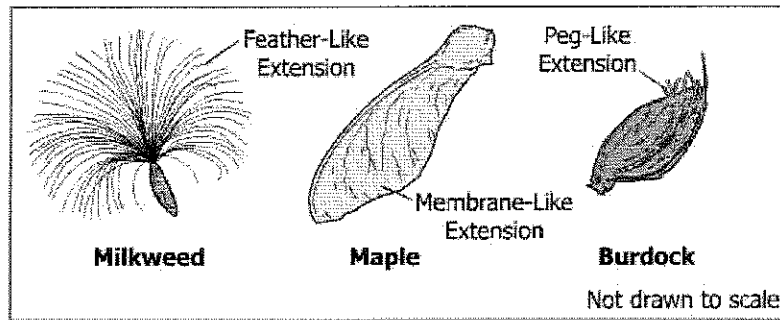
| Key | |
|-------|-------------------------|
| — | reaction without enzyme |
| - - - | reaction with enzyme |

What can be concluded from this graph?

- A The reactants have less energy than the products.
- B The enzyme is consumed during the course of the reaction.
- C The enzyme lowers the energy of activation for the reaction.
- D The amount of free energy produced in the reaction increases with an enzyme.

14 of 46

Three Plant Seeds



Which statement is an inference based on this information?

- A Plant seeds have different shapes.
- B Milkweed seeds are dispersed by wind.
- C Maple seeds have a membrane-like extension.
- D Burdock seeds have short, peg-like extensions.

15 of 46

The weakness of hydrogen bonds between the bases of DNA allows —

- A rearrangement of the sequence of bases to take place
- B base pairs to separate during transcription and replication
- C new bases to be incorporated into the DNA molecule
- D conversion of bases to amino acids in the event of cell starvation

16 of 46

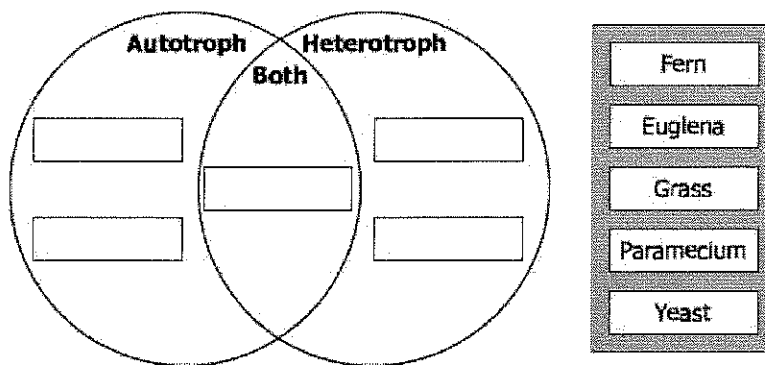
Which of these would most likely result in a change to the current classification of an organism?

- A Discovering organisms with similar physical traits in the fossil record
- B Finding a related organism that was previously considered extinct
- C Linking the organism to different ancestors through DNA sequencing
- D Observing organisms that occupy the same ecological niche

17 of 46

Directions: Click and drag the answers to the correct boxes.

Classify the organisms by their metabolic strategies.



18 of 46

Five species of frogs that live in separate habitats within 5 non-overlapping ranges along the Mississippi River share a common ancestor. Which process is most likely responsible for the formation of these five distinct species?

- A Physiological isolation
- B Geographic isolation
- C Behavioral isolation
- D Reproductive isolation

19 of 46

Chloroplast Process



The diagram shown represents the input and output of a process performed by the chloroplast of a cell. Which substance is most likely represented by Y?

- A Glucose
- B CO_2
- C ATP
- D Light

20 of 46

Investigation of Robins

1. A student notices fewer robins in her yard during the winter.
2. She thinks that some robins must migrate in the winter.
3. She counts the robins in her yard once a week for 2 years.
4. She finds that there are about half as many robins in her yard in the winter as in the summer.
5. Her research has shown that some robins are not in her yard during winter.

Which statement best describes her hypothesis?

- A A student notices fewer robins in her yard during the winter.
- B She thinks that some robins must migrate in the winter.
- C She counts the robins in her yard once a week for 2 years.
- D Her research has shown that some robins are not in her yard during winter.

21 of 46

Seaweeds occupy an important niche in the Chesapeake Bay ecosystem. Which question will best help a student identify the role of seaweeds in this ecosystem?

- A Which organisms depend on seaweeds as an energy source?
- B Which seaweed species produces the greatest amount of oxygen?
- C What wavelengths of light are photosynthesized by seaweed species?
- D What is the salinity in areas where seaweed is growing?

22 of 46

In 1950, Erwin Chargaff discovered that the percentage of adenine in DNA equals the percentage of thymine, and that the percentage of cytosine equals the percentage of guanine. This proved invaluable to the eventual discovery of which aspect of DNA?

- A** Location
- B** Solubility
- C** Structure
- D** Volume

23 of 46

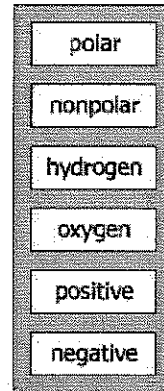
The study of embryos and other early stages of development can help in the classification of living things, past and present, by providing clues about the —

- A** prokaryotic species that are at risk for extinction
- B** rate of appearances of new terrestrial organisms
- C** barriers to mating among marine populations
- D** common ancestry among vertebrate species

24 of 46

Directions: Click and drag the correct answer to each box.

A water molecule is . It has a slightly charge on the atom and a slightly charge on the two atoms.



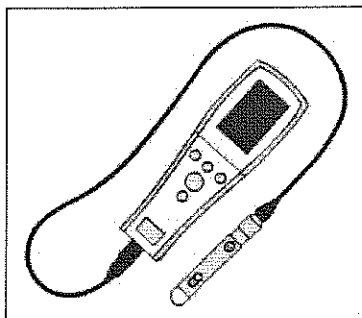
25 of 46

Which characteristic do most adult fungi and plants share?

- A They both are producers.
- B They both have cells with cell walls.
- C They both reproduce through binary fission.
- D They both have multiple nuclei in each cell.

26 of 46

Dissolved Oxygen Probe



Students use a dissolved oxygen probe during a laboratory activity involving 1,000 mL samples of pond water. The function of the probe is to —

- A create a model
- B test a hypothesis
- C gather accurate data
- D analyze investigation conditions

27 of 46

Directions: Type your answer in the box.

In a population of 120 oak trees, 25% of the population has oak wilt disease. What is the number of trees in this population that have oak wilt?

trees with oak wilt

28 of 46

An insect called the hemlock woolly adelgid was introduced to a Virginia forest ecosystem. This pest feeds on the nutrients stored inside a hemlock tree, resulting in the death of the tree. Which kind of data would best help a student evaluate the effect of this insect?

- A A comparison of the adelgid with native pest species
- B An account of how the adelgid was introduced into Virginia ecosystems
- C A list of the foreign ecosystems infiltrated by the hemlock woolly adelgid
- D Information about the ecosystem's characteristics before the adelgid infestation

29 of 46

Comparison of Transpiration Rates Over a 60 Hour Period

| Humidity (%) | Plant Species Group (10 plants each) | Type of Soil (200 g) | Average Transpiration Rate (g/dm ² /hr) |
|--------------|--------------------------------------|----------------------|--|
| 35 | Species 1 | Sand | 23.5 |
| | Species 2 | | 21.6 |
| 46 | Species 1 | Sand | 20.4 |
| | Species 2 | | 23.8 |
| 58 | Species 1 | Clay | 18.8 |
| | Species 2 | | 22.9 |
| 70 | Species 1 | Clay | 14.4 |
| | Species 2 | | 16.5 |

A student wanted to compare the transpiration rates of two different plant species at varying levels of humidity. The results are recorded in the table shown. Each plant group was given the same amount of water and light throughout the investigation. Which procedure should have been performed to prevent error in this investigation?

- A One type of plant should have been tested.
- B Fewer plants should have been included in each group.
- C The percentage of humidity should have been kept constant.
- D Both groups should have been tested in the same soil type at each humidity level.

30 of 46

In an ecosystem, a sudden decrease in the number of bacteria in the soil would most likely result in —

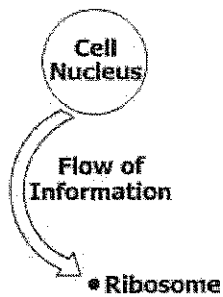
- A** increased water pollution in the soil
- B** increased precipitation and flooding of the soil
- C** a reduction in the amount of nitrogen available to the ecosystem
- D** a decrease in the number of fossils formed in the soil

31 of 46

Medicines are being produced using recombinant DNA technology. For veterinarians, the use of this DNA technology will result in —

- A** decreasing the number of antibodies produced by pets
- B** altering the chromosomes of healthy pets
- C** making more treatments available for pets
- D** identifying new diseases spread by pets


32 of 46



The arrow in the diagram represents the movement of which molecular structure?

- A DNA molecule
- B mRNA molecule
- C Base pair
- D Protein

33 of 46



Classification Key for Insects


| | |
|--|------------------------------|
| 1. a. Antennae with rounded tips | go to 2 |
| b. Antennae with pointed tips | go to 3 |
| 2. a. Wings with stripes | go to 4 |
| b. Wings without stripes | <i>Papilio polyxenes</i> |
| 3. a. Wings fringed with visible hairs | <i>Lymantria dispar</i> |
| b. Wings lacking hairs | <i>Malacosoma americanum</i> |
| 4. a. Wings with tail-like extensions shorter than antennae | <i>Papilio palamedes</i> |
| b. Wings with tail-like extensions longer than antennae | <i>Eurytides marcellus</i> |

According to the classification key, what is the genus and species of this organism?

- A *Papilio polyxenes*
- B *Malacosoma americanum*
- C *Papilio palamedes*
- D *Eurytides marcellus*

34 of 46

Jackrabbit



The jackrabbit is a desert mammal. The jackrabbit's circulatory system increases blood flow to the ears during hot days. The blood flow to the ears decreases during cool or cold nights. This circulation pattern is most directly related to —

- A detoxification
- B excretion
- C osmosis
- D homeostasis

35 of 46

Proteins are among the most diverse group of macromolecules because of the —

- A different amino acids that can be connected in many sequences
- B different types of bonds linking amino acids together
- C energy phosphate groups that the amino acids contain
- D link between each DNA base and an amino acid in a protein

36 of 46

Which is an activity that increases the genetic variation within a population of earthworms?

- A Binary fission
- B Sexual reproduction
- C Budding
- D Fragmentation

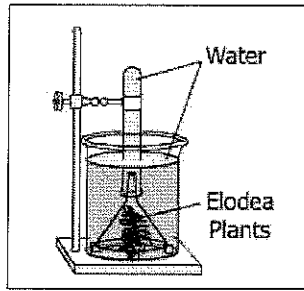
37 of 46

The structural differences between a tadpole and an adult frog are due to the —

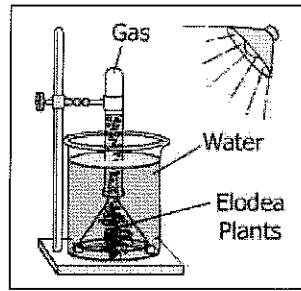
- A availability of food sources at different stages
- B type of DNA present at each developmental stage
- C combination of genetic material inherited during fertilization
- D different sets of genes expressed at each stage of development

38 of 46

Student Experiment With Elodea Plants



24-Hour Setup Without Light



24-Hour Setup With Light

After 24 hours, the amount of gas that accumulated at the top of the inverted test tube is measured. The students conclude that the light source is causing the water to evaporate, causing water vapor to fill the top of the tube. The best alternative explanation of the differences between the setups is that the —

- A gravity increased the downward flow of the trapped water
- B metabolism of the elodea plants absorbed CO₂ from the water
- C heat from the light source caused the escape of dissolved gas
- D light caused the elodea plants to photosynthesize, releasing O₂ gas

Directions: From the table headings, click and drag the answers to the correct boxes.

This table was found in a journal of student research. What are the components found in these experimental data?

Effect of Temperature on Enzyme Activity

| Test Group | Water (mL) | Starch Solution (mL) | Enzyme: Amylase (mL) | Incubation Temperature (°C) | Fractional Activity (%) |
|------------|------------|----------------------|----------------------|-----------------------------|-------------------------|
| Control | 9 | 2 | 0 | 37 | 0 |
| 1 | 8 | 2 | 1 | 37 | 74 |
| 2 | 8 | 2 | 1 | 38 | 76 |
| 3 | 8 | 2 | 1 | 39 | 78 |
| 4 | 8 | 2 | 1 | 40 | 80 |

Independent Variable

Dependent Variable

Constants

Scientists classifying modern animals are most likely to compare the —

- A structure of the animals' ATP
- B function of the animals' limbs
- C composition of the animals' bones
- D sequence of the animals' DNA

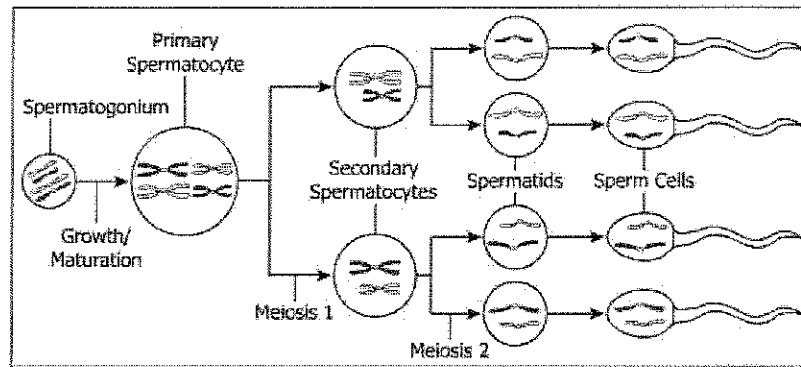
41 of 46

Which feature do viruses have in common with animal cells?

- A Ability to form proteins at the ribosomes
- B Existence of lipids in cell membranes
- C Presence of a genetic code in nucleic acid
- D Production of energy by a mitochondrion

42 of 46

Model of Spermatogenesis



According to this diagram, the result of spermatogenesis is four sperm cells, each with —

- A strands of DNA that resulted from crossing over
- B half of the original number of chromosomes
- C genetically identical strands of DNA
- D complete copies of all the original chromosomes

43 of 46

A group of ponies lives in the Chincoteague National Wildlife Reserve in Virginia. The development of longer legs over time would be selected for if —

- A it increased the survival rate of the long-legged ponies
- B it decreased the rate of reproduction of the long-legged ponies
- C it prohibited the long-legged ponies from using available food sources
- D it made the long-legged ponies run more slowly

44 of 46

One parent is heterozygous for a certain trait (Dd). The other parent is homozygous dominant (DD) for that trait. What is the percent chance that an offspring from this cross will be heterozygous?

- A 0%
- B 25%
- C 50%
- D 100%

45 of 46

Length of Elodea Stems (cm)

| Trial | Day 1 | Day 8 | Day 15 | Day 22 |
|-------|-------|-------|--------|--------|
| W | 3 | 6 | 10 | 14 |
| X | 5 | 7 | 10 | 14 |
| Y | 2 | 4 | 9 | 12 |
| Z | 4 | 7 | 17 | 13 |

Which trial in the table of data shown has questionable data?

- A W
- B X
- C Y
- D Z

46 of 46